


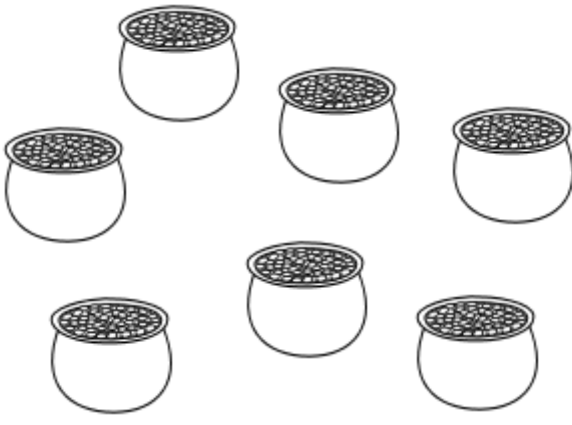




Name _____

For each box, count the number of pictures. Circle the correct number for the box.

 <hr data-bbox="205 698 661 706"/> <p>8 9 10</p>	 <hr data-bbox="850 698 1302 706"/> <p>7 8 9</p>	 <hr data-bbox="1459 698 1911 706"/> <p>8 9 10</p>
 <hr data-bbox="205 1307 661 1315"/> <p>5 6 7</p>	 <hr data-bbox="850 1307 1302 1315"/> <p>4 5 6</p>	 <hr data-bbox="1459 1307 1911 1315"/> <p>5 6 7</p>